

X-RAY DIFFRACTION AND FORENSIC GEOLOGY

I. Introduction

Minerals are crystalline solids. Individual minerals are distinguished on the basis of chemistry and the way in which the atoms are arranged (the crystal structure) in the mineral. For example, consider the mineral halite (NaCl), whose structure is shown below (Figs. 1 & 2).

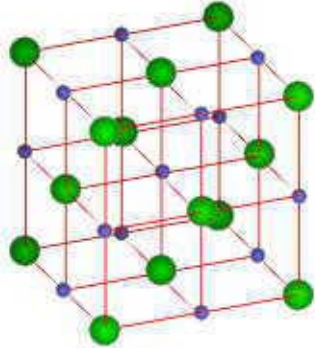


Figure 1. Crystal structure of halite. Green balls are Cl and purple balls are Na.

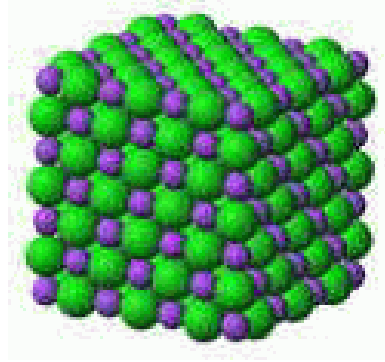


Figure 2. Close-packed arrangement of atoms in the halite structure.

Note that the atoms are arranged in planes, in this case a very simple structure with a cubic shape. One could look at planes of atoms parallel to the sides of the cube. But there are also other planes of atoms that pass diagonally through the structure. The distance between these planes depends on the way in which the atoms are arranged in the structure and the types of atoms that comprise the structure. What this means is that different crystalline substances have different spacings between planes of atoms. If we could identify these spacings we would be able to uniquely characterize the crystalline compound.

Our knowledge of the crystalline state is gained by studies utilizing x-rays (the field of x-ray crystallography). Let us suppose that a beam of monochromatic x-rays is incident on a crystal (Fig. 3). If the wavelength of the x-rays is similar to that of the spacing between the planes of atoms (for example, let us assume we are using Cu K_α radiation for which $\lambda = 1.54 \text{ \AA}$, an $\text{\AA} = 1 \times 10^{-10} \text{ m}$, a very small unit of distance) the x-rays will

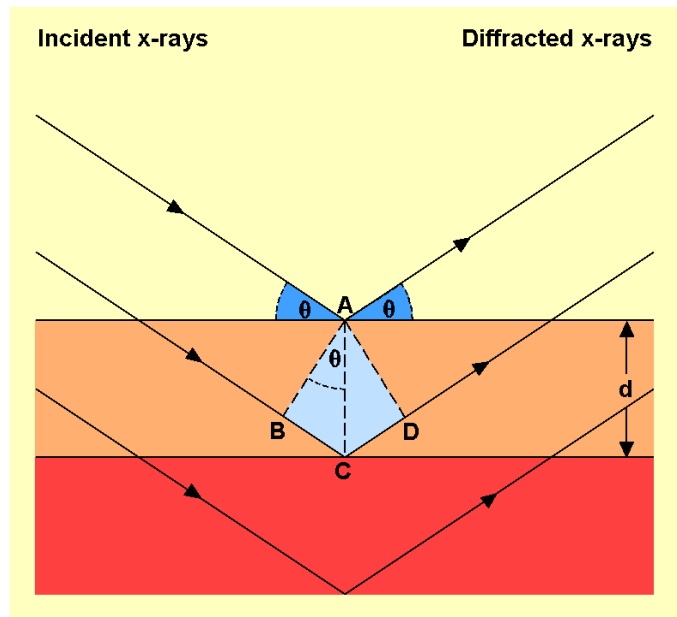


Fig. 3. Interaction between x-rays and the crystal structure.

be scattered by the atoms. For certain incident angles and spacings between the planes of atoms constructive interference will occur and a diffracted beam will leave the crystal at an angle equal to that of the incident beam. The relationship between x-ray wavelength, angle of incidence and spacing between planes of atoms is known as Bragg's Law.

$$\lambda = 2d \sin\theta$$

Where λ is the x-ray wavelength, d is the spacing between planes of atoms, and θ is the incident angle.

While a very simple equation, this relationship represents a powerful way to investigate the structure of crystalline materials. X-ray data for crystalline materials is often acquired using x-ray powder diffractometry (Fig. 4). An x-ray tube provides a monochromatic x-ray beam. Thus, the wavelength is known. The sample is in a fixed geometry, usually powder on a glass slide, and a sensor is scanned through a 2θ angle (Fig. 5). When constructive interference occurs a diffracted beam is sent to the sensor giving the 2θ angle. The remaining unknown is the d spacing. For any particular mineral there are multiple paths with different d spacings, and each of these will be recorded. In addition, for a mineral that consists of more than one element, the areal distribution of the different elements will vary as a function of the plane that is diffracting the x-ray beam. Since different atoms interact differently with the x-ray beam, the intensity of the diffracted signal varies as a function of the particular atomic plane that is responsible for the diffracted beam. Thus, we obtain a second important piece of information, the intensity of the diffracted x-ray beam, which can be related to the composition of the crystalline solid. Tens of thousands of crystalline compounds have been characterized by x-ray diffraction. Taking into account the d -spacing and relative intensities of the diffracted beam virtually every crystalline compound has a unique x-ray fingerprint. This information is available in the American Society for Testing and Materials Powder Data File which is frequently updated and contains information for all known crystalline materials. Thus, we have a powerful method for identifying crystalline solids even if individual particles are very small.

What we usually measure is the 2θ angle from which we can calculate the d spacing by solving Bragg's equation for d .

$$d = \frac{\lambda}{2 \sin\theta}$$

In the following problems we will be using a copper (Cu) x-ray tube in which case Bragg's law is

$$d = \frac{1.54\text{\AA}}{2 \sin\theta}$$



Figure 4. X-ray diffractometer.




Figure 5. Close-up view of x-ray tube, sensor, and sample (powder on glass slide). 2θ is the angle between the x-ray tube and the sensor.

Note that the diffraction angle is measured as 2θ . In the equation above we use the θ angle. Hence, the 2θ angle must be divided by 2 to get the θ angle used in the equation. For example, if the 2θ angle is 32° ; the θ angle is 16° .

Reference x-ray diffraction patterns for a number of crystalline solids are attached to this exercise. These data are to be used in answering (solving) the following problems and cases. For the unknown XRD patterns only the three most intense peaks are shown for each crystalline solid in the unknown.

II. Cosmetics

Various minerals are used in cosmetics to provide color and texture. In this exercise we will look at several types of lipsticks for which we have x-ray diffraction data. X-ray diffraction data for 4 lipsticks are shown below.

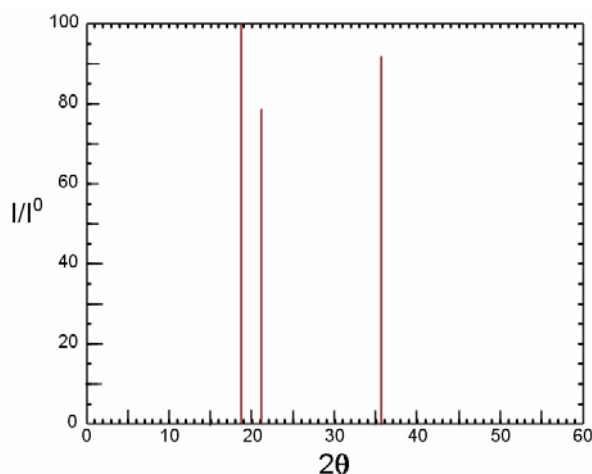


Figure 6. XRD pattern for Tropez A.

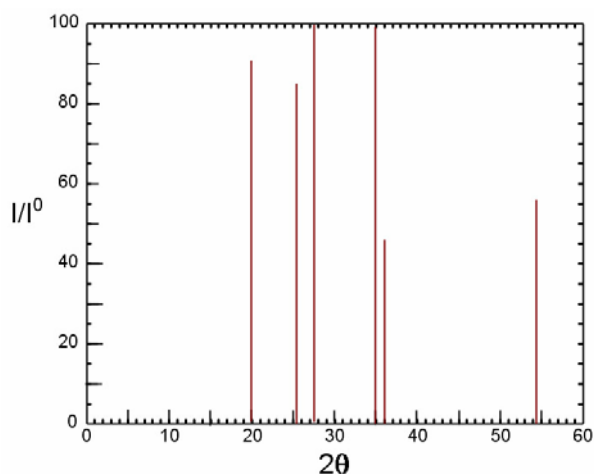


Figure 7. XRD pattern for Tropez B.

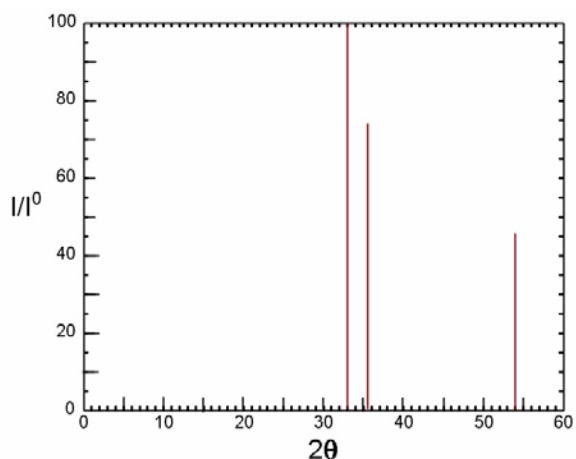


Figure 8. XRD pattern for Avon Red K.

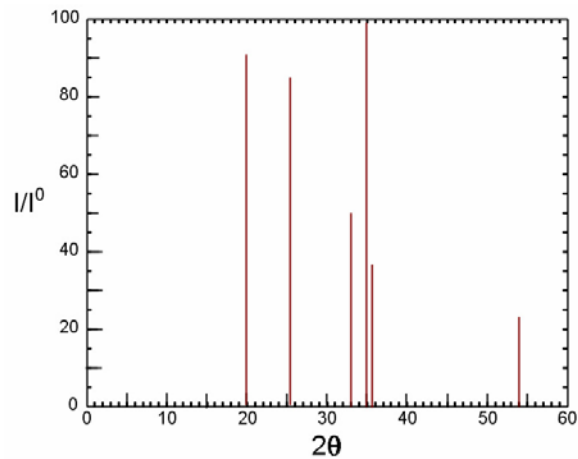


Figure 9. XRD pattern for Cover Girl Classic Red

1. For Tropez A (Fig. 6) list the 2 theta angle, relative intensity, and d-spacing for each peak.
2. Does Tropez A (Fig. 6) contain either chlorite or kaolinite. How did you make this determination?
3. By looking at the 3 largest peaks in Tropez B (Fig. 7) and Cover Girl Classic Red (Fig. 9), do these lipsticks contain the same mineral or are they different mineral assemblages?
4. Do Avon Red K and Cover Girl Classic Red contain any minerals in common? If they contain mineral(s) in common, what role might these mineral(s) play in the appearance of the lipsticks?

5. A young man is murdered, apparently an act of passion. A lipstick smear is found on his shirt collar. The man was known to be dating two women, and they are potential suspects. When taken in for questioning Suspect A was wearing Tropez B lipstick and Suspect B was wearing Cover Girl Classic Red lipstick. Both women claimed that it had been at least a week since they saw the victim. The lipstick smear recovered from the victim's collar gave the following XRD pattern (Fig. 10).

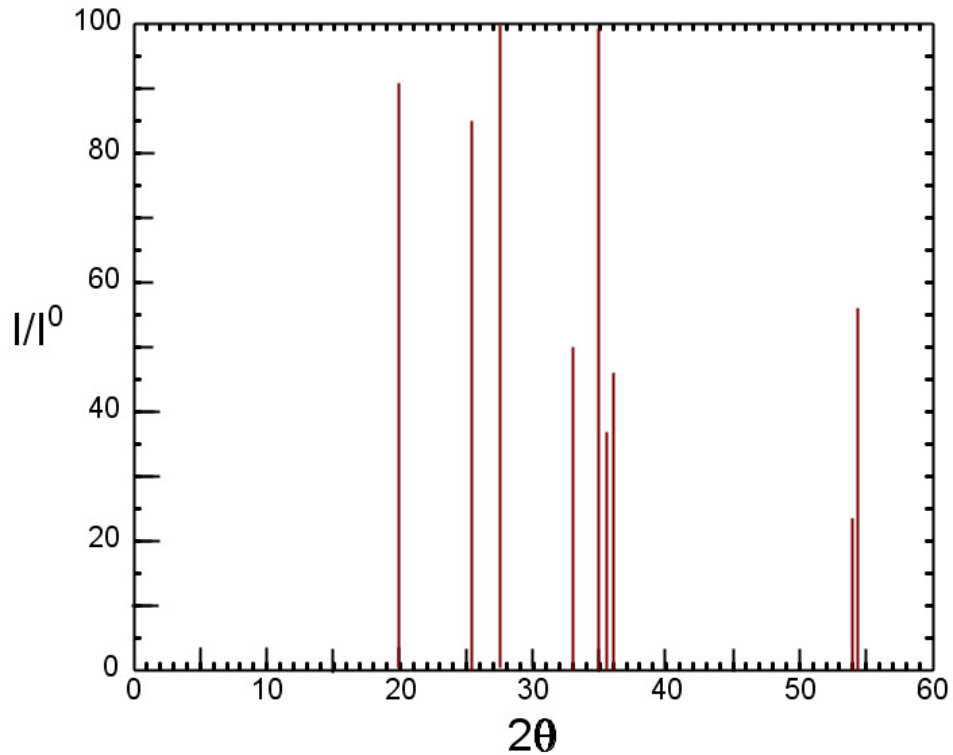


Figure 10. XRD pattern for lipstick smear recovered from victim.

From this evidence, what can you conclude about possibility of either suspect being the murderer? Explain in detail?

III. Pottery and Minerals

Minerals are used in pottery for the clay and glazes. Glazes are applied prior to firing of the pottery and provide the coloration. Given that any particular type of pottery may consist of a relatively unique group of minerals it is possible to characterize pottery from different sources. Pottery clays consists of mixtures of the following minerals - biotite, chlorite, kaolinite, kyanite, montmorillonite, pyrophyllite, and quartz. Different mixtures of minerals are used depending on the desired properties of the resulting pottery (ceramic). Minerals in the glazes are responsible for the final color of the pottery (Table 1).

Table 1. Minerals used for pottery glazes

Mineral	Formula	Color
Cassiterite	SnO_2	white
Cuprite	Cu_2O	green (oxidation), red (reduction)
Eskolaite	Cr_2O_3	green
Goethite	$\text{FeO}(\text{OH})$	yellow, tan, brown
Hematite	Fe_2O_3	tan, brown
Ilmenite	$\text{Fe}(\text{Ti},\text{Mg})\text{O}_3$	tans and buffs
Pyrolusite	MnO_2	red, blue, purple, black
Rutile	TiO_2	yellow to tan (oxidation), blue and purple (reduction)
Sphaerocobaltite	CoCO_3	blue
Tenorite	CuO	green (oxidation), red (reduction)
Zincite	ZnO	brown

6. A piece of broken pottery is found at a crime scene. The XRD pattern for this pottery is shown on the next page (Fig. 11). Identify the minerals in the pottery. To do this you need to determine the two theta values and relative intensities. List the minerals and the pertinent data below.

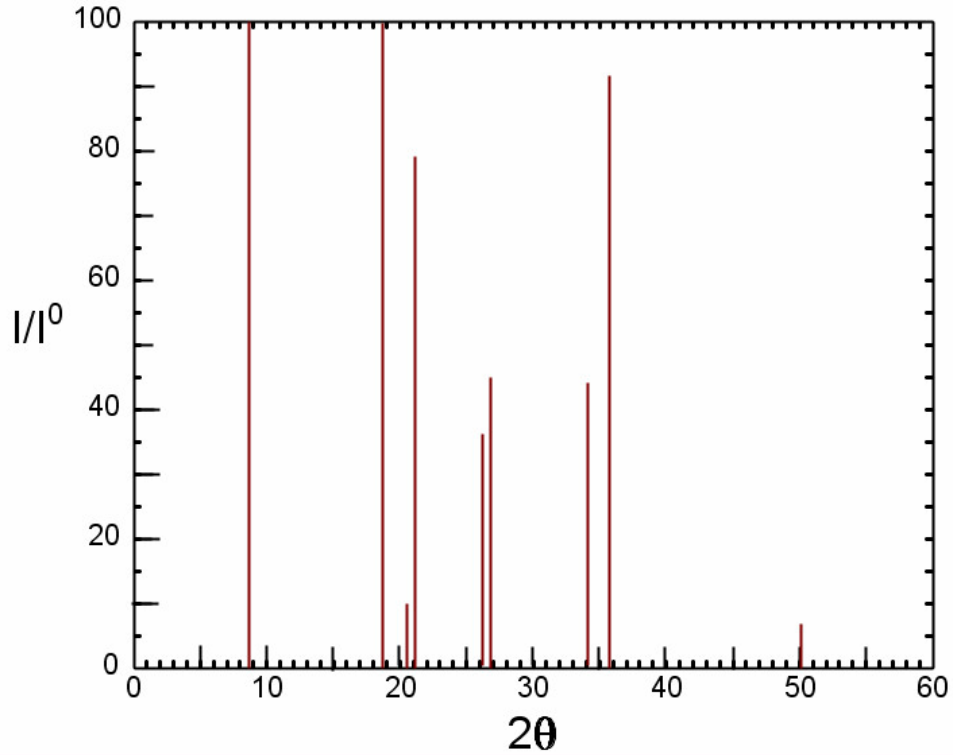


Figure 11. XRD pattern for broken pottery found at crime scene.

7. A piece of broken green pottery is found at a crime scene. A person of interest is apprehended and is found to have small bits of green pottery embedded in his shoe. The x-ray patterns for the crime scene (Fig. 12) and the pottery embedded in the shoe (Fig. 13) are shown below.

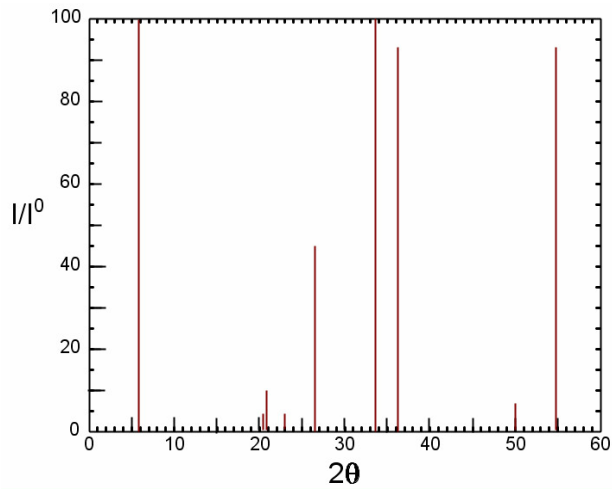


Figure 12. XRD pattern for broken pottery at crime scene.

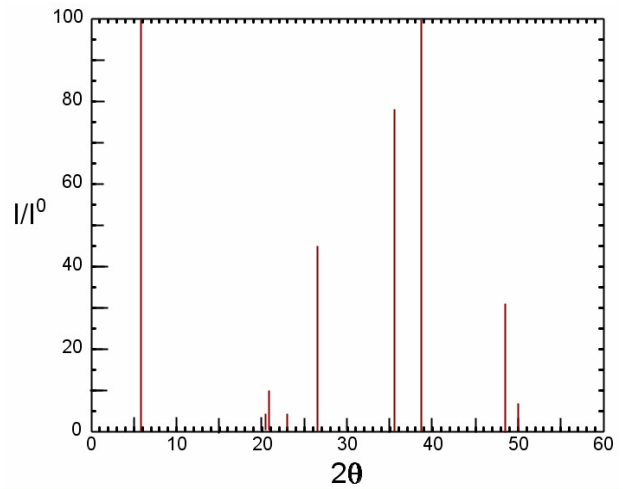


Figure 13. XRD pattern for piece of pottery embedded in suspect's shoe.

Identify the minerals in each pottery sample. Are there any differences? Explain. Is the pottery embedded in the suspect's shoe from the crime scene? Explain.

8. A nondescript powder is found adhering to a suspect's pants leg. The XRD pattern for this unknown material is shown below (Fig. 14).

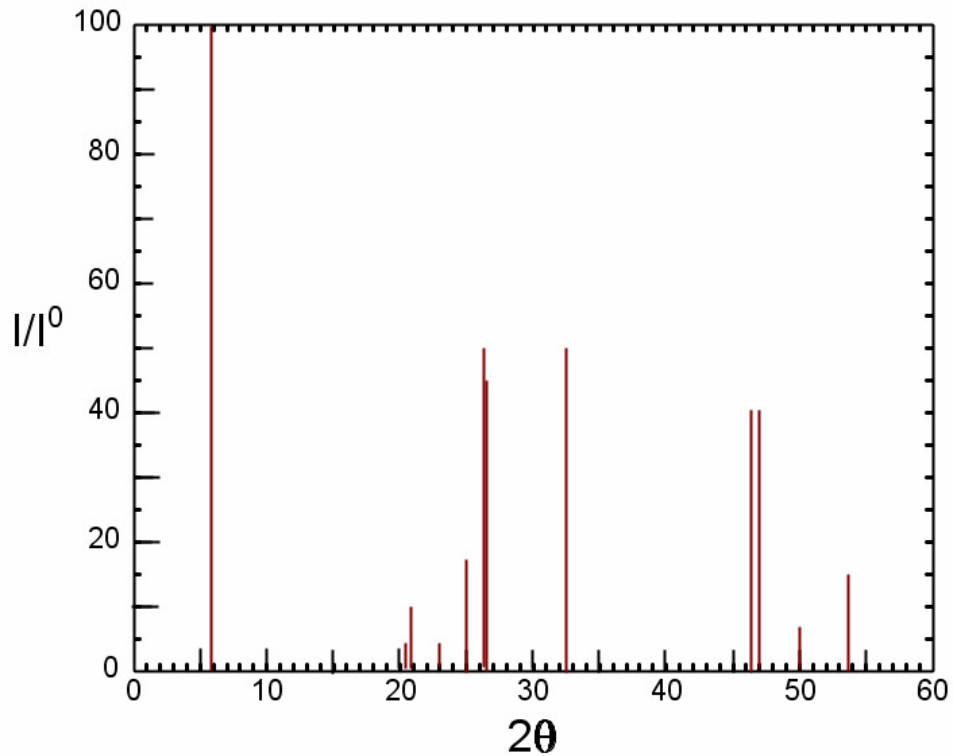


Figure 14. XRD pattern for powder on suspect's pants.

Identify the minerals in the powder. List the minerals and the relevant x-ray data. What is the source of this powder? What was the most likely color of the object that was the source of the powder? Explain.